



 **(K2) 2017 Primary 1 - Term 1 (CA1) Math (RGPS) /** Duplicate Print Delete Assign Test**Test Introduction**[Edit Introduction \(1\)](#)**11 Questions** (15 Points)Question Bank: 19,267 Questions 

Test Questions

1 Test Assignment

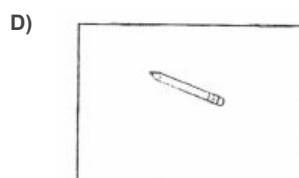
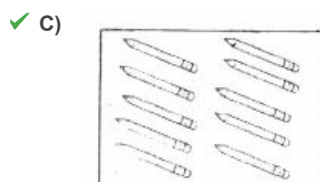
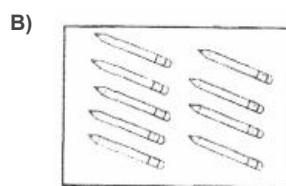
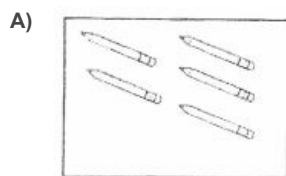
**Question 1**

Primary 1 Math » Primary 1 Math (Term 1)

1 pt

**Section A (5 x 1 mark)**

For each questions, four options are given. Choose the correct answer.

Marilyn has **10** pencils in her pencil case. Which one of the following is correct?

**Question Type:** Multiple Choice  
**Randomize Answers:** No  
**Date Added:** Sun 10th Feb 2019  
**Last Modified:** Fri 15th Feb 2019  
**QID#:** 16,147,679

[Answers](#) | [Edit](#) | [Duplicate](#) | [Used In](#) | [Reorder](#)

[Remove From Test](#)

## Question 2

Primary 1 Math » Primary 1 Math (Term 1)

1 pt

1 less than 9 is \_\_\_\_\_.

- A) 6
- B) 2
- C) 10
- ✓ D) 8

**Question Type:** Multiple Choice  
**Randomize Answers:** No  
**Date Added:** Sun 10th Feb 2019  
**Last Modified:** N/A  
**QID#:** 16,147,680

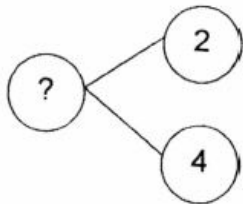
[Answers](#) | [Edit](#) | [Duplicate](#) | [Used In](#) | [Reorder](#)

[Remove From Test](#)

## Question 3

Primary 1 Math » Primary 1 Math (Term 1)

1 pt



The missing number in the circle above is \_\_\_\_\_.

- A) 4
- B) 2
- C) 7
- ✓ D) 6

**Question Type:** Multiple Choice  
**Randomize Answers:** No  
**Date Added:** Sun 10th Feb 2019  
**Last Modified:** N/A  
**QID#:** 16,147,687

[Answers](#) | [Edit](#) | [Duplicate](#) | [Used In](#) | [Reorder](#)

[Remove From Test](#)

## Question 4

Primary 1 Math » Primary 1 Math (Term 1)

1 pt

Complete the number pattern.

1	?	5	7	9
---	---	---	---	---

- A) 5  
 B) 7  
 C) 3  
 D) 4

**Question Type:** Multiple Choice  
**Randomize Answers:** No  
**Date Added:** Sun 10th Feb 2019  
**Last Modified:** N/A  
**QID#:** 16,147,689

[Answers](#) | [Edit](#) | [Duplicate](#) | [Used In](#) | [Reorder](#)


[Remove From Test](#)

## Question 5

Primary 1 Math » Primary 1 Math (Term 1)

1 pt

How many **more** cats than fishes are there?



- A) 1  
 B) 2  
 C) 5  
 D) 7

**Question Type:** Multiple Choice  
**Randomize Answers:** No  
**Date Added:** Sun 10th Feb 2019  
**Last Modified:** N/A  
**QID#:** 16,147,691

[Answers](#) | [Edit](#) | [Duplicate](#) | [Used In](#) | [Reorder](#)

[Remove From Test](#)

## Question 6

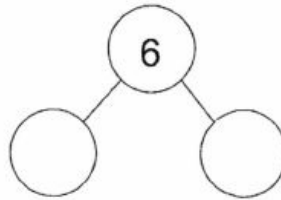
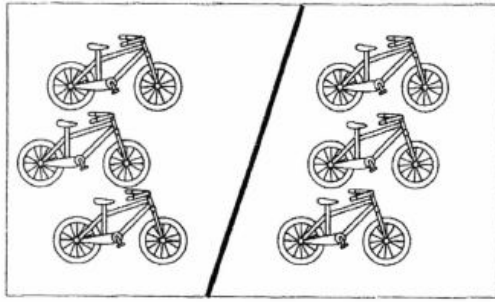
Primary 1 Math » Primary 1 Math (Term 1)

2 pts

**Section B (10 marks).**

Choose/Type the correct answers.

Look at the picture below and complete the number bond.



- A) 4,4
- ✓ B) 3,3
- C) 1,2
- D) 6,1

**Question Type:** Multiple Choice  
**Randomize Answers:** No  
**Date Added:** Sun 10th Feb 2019  
**Last Modified:** Sun 10th Feb 2019  
**QID#:** 16,147,695

[Answers](#) | [Edit](#) | [Duplicate](#) | [Used In](#) | [Reorder](#)

[Remove From Test](#)


## Question 7

Primary 1 Math » Primary 1 Math (Term 1)


2 pts

Choose the group that has **more** objects.

A)



✓ B)



**Question Type:** Multiple Choice  
**Randomize Answers:** No  
**Date Added:** Sun 10th Feb 2019  
**Last Modified:** N/A

QID#: 16,147,700


[Answers](#) | [Edit](#) | [Duplicate](#) | [Used In](#) | [Reorder](#)[Remove From Test](#)

## Question 8

Primary 1 Math » Primary 1 Math (Term 1)

2 pts

Count the number of books and type in **words**.



There are \_\_\_\_\_ books.

**Accepted answers:**

✓ four

**Question Type:** Free Text  
**Date Added:** Sun 10th Feb 2019  
**Last Modified:** N/A  
**QID#:** 16,147,707

[Answers](#) | [Edit](#) | [Duplicate](#) | [Used In](#) | [Reorder](#)[Remove From Test](#)

## Question 9

Primary 1 Math » Primary 1 Math (Term 1)

2 pts

Which **two** numbers make 6?

- A) 0
- ✓ B) 1
- C) 3
- D) 4
- ✓ E) 5

**Question Type:** Multiple Response  
**Randomize Answers:** No  
**Grade style:** Full points if all answers are correct  
**Date Added:** Sun 10th Feb 2019  
**Last Modified:** N/A  
**QID#:** 16,147,710

[Answers](#) | [Edit](#) | [Duplicate](#) | [Used In](#) | [Reorder](#)[Remove From Test](#)

## Question 10

Primary 1 Math » Primary 1 Math (Term 1)

1 pt

Look at the number pattern and answer questions 10 and 11.



The missing number is \_\_\_\_\_.

**Accepted answers:**

✓ 7

**Question Type:** Free Text  
**Date Added:** Sun 10th Feb 2019  
**Last Modified:** N/A  
**QID#:** 16,147,715

[Answers](#) | [Edit](#) | [Duplicate](#) | [Used In](#) | [Reorder](#)

[Remove From Test](#)

## Question 11

Primary 1 Math » Primary 1 Math (Term 1)

1 pt



\_\_\_\_\_ is **greater** than 1 but **smaller** than 5.

**Accepted answers:**

✓ 3

**Question Type:** Free Text  
**Date Added:** Sun 10th Feb 2019  
**Last Modified:** N/A  
**QID#:** 16,147,718

[Answers](#) | [Edit](#) | [Duplicate](#) | [Used In](#) | [Reorder](#)

[Remove From Test](#)